

## Maths Challenge

Ask your grown up if you can count the coins they have got?

How many are 10p coins?

Practise writing these numbers at home.



N8


13

## Maths Challenge

What numbers can you see in the registration plate of your car?

Which is the smallest number? Which is the largest number?

Practise writing these numbers at home.




## Maths Challenge

Do you have a clock in your house?

What is the biggest number you can read on the clock?

What would be the next number?

Practise writing all the numbers that are on the clock.



N587

15

## Maths Challenge

Can you find any numbers in your house?


Practise writing these numbers at home.



## Maths Challenge

Count how many drawers there are in your whole house.

Practise writing these numbers at home.



N6

17


## Maths Challenge

How many windows are in your house?

How many are upstairs?

How many are downstairs?

Practise writing these numbers at home.




N68

18

## Maths Challenge

Can you make a repeating pattern using forks and spoons?



SSM4

5

## Maths Challenge

How many footsteps from  
Your house to the bottom of your garden?  
Your front door to your bedroom?  
Your kitchen to your bathroom?

What happens to the number if you take bigger steps?

Practise writing these numbers at home.




N489

19


## Maths Challenge

Can you find something that is a square shape in your house?

Can you find something that is a rectangular shape in your house?



Can you find something that is a circular shape in your house?



SSM6

6

## Maths Challenge

How long does it take to have a bath?

How did you work it out?



SSM8


7

## Maths Challenge

Are you taller or shorter than a door?

Are you taller or shorter than an armchair?

Are you taller or shorter than a window sill?



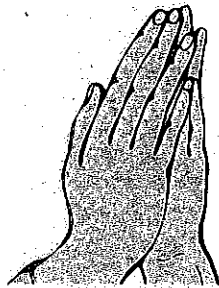
SSM67

8

## Maths Challenge

Who has the biggest hands in your family?

How can you tell?



SSM7

9

## Maths Challenge

Who is the tallest person in your house?

Who is the shortest person in your house?

How did you measure them?



SSM46

11


## Maths Challenge

How wide is your bed?

How long is your bed?

How can you find out?

Practise writing these numbers at home.




SSM8

10

## Maths Challenge

Can you sort the cutlery in your house into different sets?

How did you do it?




SSM78

1

## Maths Challenge

Do 10 jumps in each room of your house. Count each jump to make sure you do 10.

Practise writing number 10 at home.




N6

12



## Maths Challenge

Can you add up the numbers on a car registration plate?



Practise writing these numbers at home. CA6

2

## Maths Challenge

Can you find 4 different sized shoes in your house and put them in order of size?

What else can you find to order my length?



SSM68

3

## Maths Challenge

Find a pattern in your house, e.g. wallpaper, tiles, on the duvet.

Can you describe it?

(It could be squares/circles....)

See if you can draw your own pattern.

SSM4

4

